

ATOMIC ENERGY CENTRAL SCHOOL – 3, MUMBAI.

Periodic Test --1 (July. 2024)

CLASS : IV Sec :_____ Sub.: EVS Date:_____ Time : 1½ hrs.


Unique Identification no. : _____ Max Marks:40

Invigilator's Sign: _____ Examiner's Sign:_____ Marks obtained :

Q1. Choose the correct answer from the brackets. (1 x 5 = 5 m)

- 1) _____ is an animal with ears on the top of its head.
(Elephant / Rabbit)
- 2) A _____ bee lays eggs. (male / queen).
- 3) Zebras move around in groups called _____. (colonies / herds).
- 4) Anita Khuswaha lives in the Bochaha village in _____ (Bihar / Rajasthan)
- 5) The _____ ants look after and guard the ants' nest. (worker / soldier)

Q 2. Identify the picture and name it. (1 x 3 = 3 m)



Q 3. Match the following. (1 x 4 = 4 m)

- | | |
|------------------|--|
| 1) Vallam | Gujarat |
| 2) Camel carts | right to free and compulsory education |
| 3) Jugad | a small boat used in Kerala |
| 4) RTE -Act 2009 | Rajasthan |

Q 4. Name the following.

(2 x 3 = 6 m)

a) Two things used to make a cement bridge.

b) Two insects that live in groups.

c) Two animals whose ears cannot be seen.

Q 5. Give reasons for the following.

(2 x 3 = 6 m)

a) Elephants love to play with mud and water.

b) The best time to start bee-keeping is from October to December.

c) An Egret sits on the back of the buffalo. Why?

Q 6. Answer the following questions in one sentence each. (1 x 2 = 2 m)

1) Who are the Bishnois?

2) When does a worker bee do a special kind of dance?

Q 7. Write four sentences on “Khejadi trees”.



(4 m)

Q 8. Write True or False .

(1 x 4 = 4 m)

- a) Trolley is an open box made of wood . _____
- b) The oldest male elephant is the leader of a herd. _____
- c) Squirrels lay eggs. _____
- d) Birds have no ears. _____

Q10. Draw and colour two animals whose ears cannot be seen. (1 x 2 = 2 m)



Q 9. Mark the following states on a political map of India. (1 x 4 = 4 m)

(Assam Gujarat Rajasthan Kerala)

